



SCHOLARS PRIDE

SCHOLARS PRIDE
SECTOR-16, FARIDABAD
MODEL TEST PAPER (2019-20)
CLASS- IV
SUBJECT – ENGLISH

TIME: 2 hrs.
M.M: 60

SECTION – A

1. Read the passage carefully and answer the following questions: 5

Weather is the particular condition of atmosphere in terms of temperature, pressure and wind. Different seasons have different weather like in winter season we feel cold. Similarly, in summers we feel hot. Weather can be hot, cold, dry, humid and windy. Every season has its own weather, and this is because of sun. Country like in India, has mainly 3 types of seasons. These are summer, rainy and winter. In summer season, the weather is hot and dry in most parts. In rainy season, the weather is quite humid while in winters, the weather is cold. Weather changes from hour to hour. Different weather conditions are observed in different countries at the same time because of the position of the sun. Afternoon is the hottest part of the day because the position of sun is overhead at that time. So, the sunrays fall directly on the ground. But the position of the sun is low in the sky in evening and morning. So, its not that hot at that time.

1. What are the three types of seasons in India?
2. What is weather?
3. Why does weather changes from hour to hour?
 - a. Because of sun
 - b. because of moon
 - c. Because of stars
4. Which is the hottest part of the day?
 - a. Afternoon
 - b. Evening
 - c. Morning
5. Give an antonym of cold.

2. Read the following passage carefully and answer the following questions: 5

Water is extremely important for human beings. We cannot survive without it. We use water for a number of domestic purposes including cooking, washing, bathing, cleaning and sanitation. Water is used for irrigation also. The process of supplying water to an area of land through pipes and channels to facilitate cultivation is known as irrigation. It is used when a field or farm cannot be watered by natural sources. India is a country of varied geographical features. Every state does not have perennial and heavy flowing rivers. Yet crops are cultivated in almost all parts of the country with the help of irrigation. There are many benefits of irrigation. Farmers do not have to depend on the availability of rainwater. The quantity of crops can be estimated. Fields can be watered even during the dry months.

Questions:

1. Water is used for _____.
 - a. Domestic purposes
 - b. washing
 - c. cooking
 - d. cleaning
2. The area of cultivation increases because of _____.
 - a. Natural resources
 - b. irrigation
 - c. heavy flowing rivers
3. What is called irrigation?
4. What are the benefits of irrigation?
5. Give an antonym of benefit.

SECTION –B (WRITING AND GRAMMAR)

- 3. Write a letter to your grandmother requesting her to help you in your science project. 6**
- 4. Write a paragraph on ‘a visit to a museum’. 4**

5. Look at the given picture and write six lines on it.

3



6. Fill in the blanks with appropriate adverb:

3

- Ravi will think _____.
- The meeting was held _____.
- She _____ loses temper.

7. Rewrite the following sentences after changing the underlined nouns to the opposite gender: 1.5

- The grandmother ate an apple.
- I have a sister.
- The tiger was hidden behind the tree.

8. Fill in the blanks with suitable conjunctions: 3

- Mother Teresa said _____ her aim of life was to serve people.
- Leave early _____ you want to avoid traffic jam.
- She sat at a table _____ wrote the application.

9. Identify the types of sentences: 2.5

- She has failed again.
- Wow! I have won the lottery.
- Go ahead.
- Where is the cat?
- One should be kind to animals

10. Fill in the blanks with suitable prepositions: 2

- They shouted _____ us for no reason.
- The kitten was sitting _____ the table.
- There were four eggs _____ the sparrow's nest.
- She knew nothing _____ her.

11. Fill in the blanks with past tense of the verbs: 2

- Yesterday, I _____ with an accident. (meet)
- Last year I _____ my graduation. (pass)
- Our teacher _____ the previous lesson. (explain)
- I _____ on the last bench. (sit)

12. Fill in the blanks with suitable homophones: 1

- The villager looks after a _____ of cattle. (heard, herd)
- My fever vanished with just one _____ of the medicine. (dose, doze)

13. Fill in the blanks with the synonyms of the words given in the brackets: 2

- The company's earnings for the last year are published in the _____ report. (annual)
- The table was decorated with _____ flowers. (attractive)
- The room was very _____. (calm)
- We should _____ programme as early as possible. (start)

- 14. Fill in the blanks with the antonyms of the words given in the brackets:** **2**
- a) The room was decorated with _____ flowers. (artificial)
 - b) They _____ the offer given to them. (accept)
 - c) Yesterday, I saw a/an _____ painting. (beautiful)
 - d) Please use the _____ to leave the premises. (entrance)

- 15. Complete the following similes:** **1**
- a) as blind as _____
 - b) as deep as _____

SECTION-C (LITERATURE)

- 16. Answer the following questions:** **1.5×4=6**
- a) Where did Bishal live?
 - b) Why was Atri called a sunny place?
 - c) What was Grandad's little gadget made of?
 - d) Describe the character of Bishal.

- 17. Write the meaning of the following words and make sentences:** **2**
- a) Bother
 - b) Starving

- 18. Read the extract given below and answer the questions:** **2**

1. "He pretended to be very interested"

- a) To whom does 'He' refer?
- b) Why did the speaker pretend to be very interested?

2. "He worked as newsboy on a train, he learned to telegraph." **2**

- a) To whom does "He refer?
- b) Name the poem and poet of the poem.

- 19. Answer the following questions on the basis of the reading of the novel: (2/1/2 × 2=5)**

- a) Write the character sketch of The Princess.
- b) How did the two-headed bird die?



SCHOLARS PRIDE

SCHOLARS PRIDE
SECTOR-16, FARIDABAD
MODEL TEST PAPER (2019-20)
CLASS- IV
SUBJECT – HINDI

TIME: 2 hrs
M.M: 60

खण्ड—'क' (अपठित बोध)

नोट:— सभी प्रश्न अनिवार्य हैं। स्वच्छता का विशेष ध्यान रखें।

प्र.1 निम्नलिखित गद्यांश को पढ़कर पूछे गए प्रश्नों के उत्तर दो।

4

हरे भरे पेड़-पौधों का हमारे जीवन में बहुत महत्व है। हमें इनसे जो शुद्ध वायु मिलती है उसे ऑक्सीजन कहते हैं। प्राणियों के लिए ऑक्सीजन प्राण-वायु है। हम साँस लेने के लिए इसका प्रयोग करते हैं। साँस लेने के बाद हम अशुद्ध वायु को छोड़ते हैं। इसे कार्बन-डाइ-ऑक्साइड कहते हैं। पेड़-पौधो इस अशुद्ध वायु को सोखकर वातावरण को शुद्ध बनाते हैं।

प्रश्न—

- क) हमारे जीवन में किसका बहुत महत्व है?
ख) प्राणियों के लिए ऑक्सीजन क्या है ?
ग) पेड़-पौधे वातावरण को कैसे शुद्ध बनाते हैं ?
घ) गद्यांश में आए दो विशेषण शब्द लिखों।

खण्ड –ख साहित्य

प्र.2.निम्नलिखित पठित गद्यांश को पढ़कर निम्नलिखित प्रश्नों के उत्तर दो।

4

खाने –पीने की चीजों में तो बनारसी कलाकंद का स्वाद बेजोड़ है । वैसे बनारस का पान भी पूरे देश में प्रसिद्ध है । लेकिन बच्चों को पान नहीं खाना चाहिए। बनारस के रेशमी वस्त्र एवं साड़ियाँ कालीन और काष्ठ शिल्प आदि भी विश्व – विख्यात है ।

प्रश्न—

क) पाठ का नाम लिखो ।

ख) बनारस में खाने की कौन सी चीजें प्रसिद्ध हैं ?

ग) बच्चों को क्या नहीं खाना चाहिए ?

घ) गद्यांश में से दो विशेषण शब्द छाँटकर लिखो ।

प्र.3 निम्नलिखित काव्यांश को पढ़कर प्रश्नों के उत्तर दो

4

है शोक यही , अरमान यही ,
हम करके कुछ दिखलाएँगे ,
मरने वालों की दुनिया मे हम,
अमरों मे नाम लिखाएँगे ।

प्रश्न—

क) कविता का नाम लिखें

ख) प्रस्तुत कविता में किसने अपने अरमान बताए हैं ।

ग) बच्चे अपना नाम कहाँ लिखवाना चाहते हैं ?

ड.) काव्यांश में से दो तुकांत शब्द छाँटकर लिखो

प्र.3.निम्नलिखित प्रश्नों के उत्तर पाठ्य पुस्तक 'मुक्तांजलि' के आधार पर दीजिए।

1/2×4=6

क) गरीब व्यक्ति ने नाशपाती क्यों चुराई थी ?

ख) अच्छे लोग बुरे लोगों से बचकर क्यों निकलते हैं ।

ग) काशीराज के चरित्र के बारे में सुनकर कोशलराज ने क्या किया ?

घ) बतख की पूँछ के नीचे स्थित ग्रथी से निकलने वाला तेल क्या काम करता है ?

प्र.4. निम्नलिखित प्रश्नों के उत्तर एक वाक्य में दीजिए:-	2
क) टीना बतख के कितने चूजे थे ?	
ख) गरमी से बेहाल चिंपू ने किस बात का मन बनाया ?	
प्र.5.क) निम्नलिखित शब्दों के अर्थ लिखो।	1
प्रभाव , रोचक	
ख) वाक्य बनाओ।	1
लोभ	
ग) बताइये किसने, किससे कहा।	1
1. तुम अपना रथ पीछे हटा लो।	
घ) रिक्त स्थानों की पूर्ति कीजिए-	1
1. सभी दरबारी और राजा ----- खड़े रहे।	
2. कोशल देश के राजा भी बड़े ----- राजा थे।	
ङ) निम्नलिखित वाक्यों में सही कथन के आगे $\sqrt{\quad}$ तथा गलत पर \times लगाइये।	1
1. बतख के पाँच बच्चे जल्दी तैरना सीख गए।	
2. चिंपू ने चिकलू को कुचल दिया था	
खण्ड-‘ग’ (व्याकरण)	
प्र.6. क) निम्नलिखित वाक्यों में रेखांकित शब्दों के लिंग बदलकर वाक्य दुबारा लिखिए।	2
1. <u>नायक</u> अभिनय कर रहा है।	
2. <u>अध्यापक</u> ने पाठ पढ़ाया।	
ख) उचित वचन छाँटकर रिक्त स्थानों की पूर्ति करें।	1
1. फूलवाला फूलों से बना रहा है। (माला / मालाएँ)	
2. सभी ने वर तथा को आशीर्वाद दिया। (वधू / वधुओं)	
ग) निम्नलिखित शब्दों के सही विलोम शब्दों पर $\sqrt{\quad}$ का चिह्न लगाइये।	1
1. आदर - प्रसन्न विषाद अनादर	
2. कोमल - कठोर अंत अयोग्य	
घ) निम्नलिखित शब्दों के दो-दो पर्यायवाची शब्द लिखें।	2
संसार , हवा	
ङ) निम्नलिखित वाक्यांशों के लिए एक शब्द लिखें।	2
1. जो स्त्री कविता लिखती हो	
2. दूसरे देश की वस्तु	
प्र.7. क) वाक्यों में विराम चिह्न लगाओ।	2
मैंने अंदर बाहर सभी जगह सफाई की	
वाह मेरी नई पुस्तक आ गई	
ख) अशुद्ध शब्दों को शुद्ध करो	3
1. आग्या - 2. मखन - 3. मक्खीयाँ -	
ग) निम्नलिखित मुहावरों के अर्थ लिखकर वाक्यों में प्रयोग करें।	3
1. चार चाँद लगाना 2. दुम दबाकर भाग जाना	
घ) क्रिया विशेषण किसे कहते हैं?	2
ङ) उचित क्रिया द्वारा वाक्य पूरे करो।	2
1. नितिन अखबार	
2. राधिका नृत्य	
च) निम्नलिखित वाक्यों में उचित विशेषण शब्दों द्वारा रिक्त स्थान भरो-	2
1. राधा ने फॉक पहना है।	
2. मुझे फूल चाहिए।	
छ) निम्नलिखित वाक्यों को शुद्ध करके लिखे	2
1. आदमी को काटकर सेब खिलाओ।	
2. मेरे को तेरे को कुछ कहना है।	

खण्ड— 'घ' (रचनात्मक व सृजनात्मक कार्य)

प्र.10. गमला टूट जाने पर क्षमा माँगते हुए प्रधानाचार्य को पत्र लिखिए। 4
अथवा

मित्र को जन्मदिन की बधाई पत्र।

प्र.11. निम्नलिखित विषयों में से किसी एक विषय पर 60–70 शब्दों में अनुच्छेद लिखिए। 4
क्रिसमस, वृक्षों के लाभ , बाल दिवस

.....

.....

.....

.....

.....

.....

.....

.....

.....

.....

.....

.....

.....

.....

.....

.....

.....

.....

.....

.....

.....

.....

.....



SCHOLARS PRIDE

SCHOLARS PRIDE
SECTOR-16, FARIDABAD
MODEL TEST PAPER (2019-20)
CLASS- IV
SUBJECT – MATHEMATICS

TIME: 2 hrs.
M.M: 60

SECTION – A

1. Mental
(1×10=10)

Math

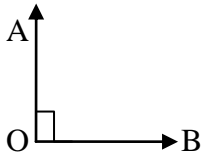
:

- e) We use a _____ for separating rupees and paisa .
- f) A part of line is called a _____.
- g) The longer hand is called a _____ hand.
- h) The _____ sides of rectangle are equal .
- i) 1 kg = _____ g.
- j) The perimeter of a square is _____ × side .
- k) The number of 5 rupee notes in ₹ 100 is _____.
- l) A polygon with 5 sides is called _____.
- m) If 1 umbrella represents 2 people then 4 umbrellas represent _____ people.
- n) 4 hours = _____ minutes.

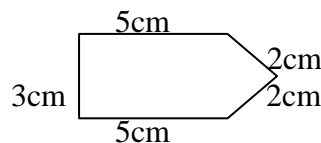
SECTION-B

(2×10=20)

- 1. Convert into paisa
 - a) 36 rupees 74 paisa
 - b) 59 rupees 5 paisa
- 2. Measure the given angle using protractor . Also identify the type of angle

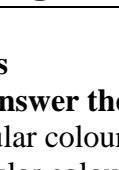
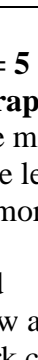
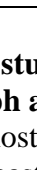





- 3. Convert the following :
 - a) 12 minutes 10 seconds to seconds.
 - b) Check : Was 2010 a leap year?
- 4. Add the given amount :
₹ 184.50 and ₹ 534
- 5. The diameter of a circle is 32 cm. Find its radius.
- 6. Convert the following :
 - a) 6 weeks 3 days into days
 - b) 2 years 3 months into months
- 7. Convert the following :
 - a) 9 km 223 m into metre.
 - b) 4300 kg into kg and g.
- 8. Seema bought 18 L of water . She used 13 L 750 ml in one day . How much water is left ?
- 9. Find the area of a square whose side is 12 cm .
- 10. Find the perimeter of the following figure



SECTION –C**(3 × 6 = 18)**

11. Add: 9 hours 57 minutes and 4 hours 19 minutes.
12. The perimeter of a rectangle is 180 cm and its breadth is 34 cm . Find the length of the rectangle.
13. Draw a Quadrilateral MNOP : Name its
 - a) sides
 - b) vertex
 - c) opposite sides.
14. Mohit bought a idli cooker for ₹ 2550.75. He paid ₹ 3000.00 to a shopkeeper. How much money is left with him?
15. Suman bought 500 ml oil. Shweta bought 3L 250 ml oil. What is the total quantity they buy in all?
16. The pictograph shows the favorite colour of different number of students.

Red	
Blue	
Green	
Pink	
Orange	






One  = 5 students

Read the pictograph and answer the questions given below.

- a) Which is the most popular colour among the students ? _____
- b) Which is the least popular colour among the students ? _____
- c) How many more students like pink colour than green ? _____

SECTION –D**(4 × 3 = 12)**

17. Do as directed
 - a) Draw a circle of radius 5cm
 - b) Mark centre of the circle with O
 - c) Draw a chord RS
 - d) Draw diameter MN
18. a) If 25 November 2018 was Sunday. What was the day on 5 December 2018?
b) What time it will be : 5 hrs after 2:15 p.m.
19. Ritu , Shivam, Rohan, Gunjan and Sonam took part in a apple eating competition. The pictograph shows the number of apples eaten by all.

Name of Student	Number of apples
Ritu	
Shivam	
Gunjan	
Sonam	
Rohan	

One apple represents 3 Apples.

Read the pictograph carefully and answer the following questions:

- a) Who ate the maximum number of apples?
- b) Who ate the least number of apples ?
- c) Who ate equal number of apples?
- d) How many apples Gunjan ate more than Shivam?



SCHOLARS PRIDE

SCHOLARS PRIDE
SECTOR-16, FARIDABAD
MODEL TEST PAPER (2019-20)
CLASS- IV
SUBJECT – GENERAL SCIENCE

TIME: 2 hrs.
M.M: 60

1. Tick(√) the correct option: 6

- i) Japanese women wear-
a) saree b) kimonos c) lehanga d) all of these
- ii) Raindrops pass through cold region and freezes are called as
a) fog b) snow c) hail d) dew
- iii) Thursday known as Brahaspatiwar named on which planet?
a) Mercury b) venus c) Jupiter d) Mars
- iv) The solid that dissolves in liquid is called
a) solution b) solvent c) solute d) water
- v) Which of the following is biodegradable waste
a) wood b) plastic c) glass d) rubber
- vi) which of these is simple machine?
a) Lever b) pulley c) screw d) all of these

2. State whether the following statements are true or false. Correct the false statement: 6

- a) Lawyers wear white coats.
b) Deforestation help to prevent soil erosion.
c) Sir Issac Newton discovered Energy.
d) Uranus is the Dwarf planet.
e) Liquid does not have definite volume.
f) Afternoon is the hottest part of the day.

3. Fill in the blanks: 6

- a) Clusters of stars forming patterns is called _____
b) Cool wind blowing from land to sea is called ____
c) Aquatic plants are adversely effected by _____ pollution
d) _____ is defined as the ability to do work.
e) _____ is a solid but changes its shape.
f) _____ protects us from getting wet in the rain.

4. Match the column: 3

- | | |
|--------------------------|------------------------|
| a) Milky way | Natural fibre |
| b) Linen | Leaves and fruits peel |
| c) Biodegradable waste | Assam |
| d) Earth | 5 June |
| e) Mekhla Chadar | Geothermal Energy |
| f) World environment day | Galaxy |

5. Give two examples of each of the following: 2

- a) Simple machines b) Pollution

6. Give reasons: 6

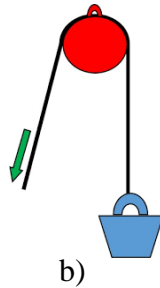
- a. Clothes should be dried in Sun.
b. Chlorine is added to water.

- c. Uranus is the fastest rotating planet.
- d. It is difficult to walk on ice.
- e. Fragrance of perfume spreads throughout the room.
- f. We must reduce the use of plastics.

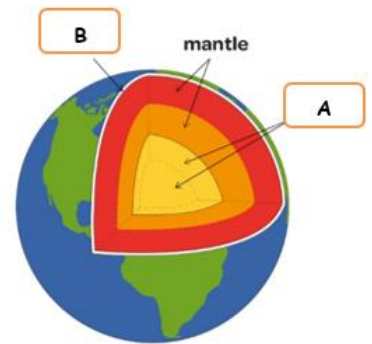
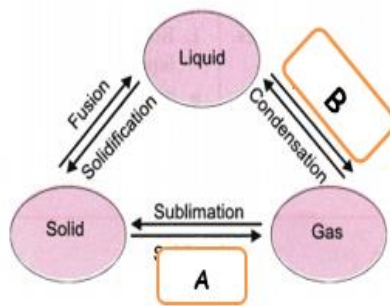
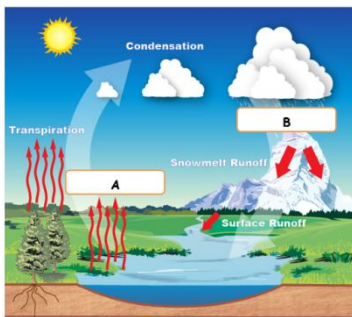
7. **Difference between the following:** 8

- a) Biodegradable and non biodegradable waste
- b) Gravitational and Frictional force
- c) Sublimation and Evaporation
- d) Liquids and gases

8. **Identify the pictures:** 3



9. **label 'A' and 'B' and write one line about each part:** 6



1. **Draw a well label diagram of land breeze.** 2

2. **Answer the following:** 12

- a) Why do solids have definite shape, where as liquids and gases do not?
- b) What is the significance of World Environment Day?
- c) What are the effects of land pollution?
- d) Write a short note on atomic energy?
- e) How can we take care of the clothes we wear?
- f) Energy can neither be created nor be destroyed. Justify the statement.



SCHOLARS PRIDE

SCHOLARS PRIDE
SECTOR-16, FARIDABAD
MODEL TEST PAPER (2019-20)
CLASS- IV
SUBJECT – SOCIAL SCIENCE

TIME: 2 hrs
M.M: 60

I. Fill in the blanks.

1×5=5

- _____ means that every Indian citizen is to be treated equally.
- _____ soil is made of fine silt brought down by the rivers.
- _____ provides water to river, ponds and lakes..
- _____ is a term used for drinks.
- The House of People is the other name of _____.

II. Choose the correct answer from the given option.

0.5×5=2.5

- 'Kanha' National Park is situated in _____.
a) Uttar Pradesh b) Punjab c) Haryana d) Madhya Pradesh
- In India, at least _____ per cent of total population is involved in industries.
a) 5 b) 10 c) 15 d) 7
- Wheat is a staple food in _____ India.
a) North b) South c) East d) West
- Raja Ram Mohan Roy was a _____.
a) Poet b) Musician c) Reformer d) Teacher
- The _____ is the head of the state.
a) Minister b) President c) Governor d) Prime Minister

III. Match the following:

0.5×5=2.5

Column A

Column B

- | | |
|------------------|------------------------|
| 1. Tidal | a) Satluj |
| 2. Bhakra Nangal | b) Bajra |
| 3. Millet | c) Sundari |
| 4. Shantiniketan | d) Rabindranath Tagore |
| 5. Supreme Court | e) The Highest Court |

IV. Read the following statements carefully and write 'T' for true statements and 'F' for false one. Correct the false one.

1×5=5

- Soil erosion is a process in which the topsoil is washed or blown away by water or wind.

- Tree in Tidal Forests have long deep roots and more thorns.

- Wells are deep holes dug in the ground so that ground water can be drawn out.

- Mahavira's songs are popularly known as Rabindra Sangeet.

- The Gram Sabha looks after the need of the people of a state.

V. Define the following:

1×4=4

1. Directive Principle :

2. Humus :

3. Extinct animals:

4. Groundwater:

VI. Answer the following questions(two – four sentences):

2×5=10

1. Differentiate between Fundamental Rights and Fundamental Duties.

2. List the factors which influence the growth of trees.

3. What are the benefits of irrigation?

4. How have the means of communication developed with time?

5. What are the teachings of Lord Mahavira?

VII. Answer the following in short :

3×4=12

1. What is a constitution? What are the ideals of the constitution?.

2. How is soil formed? Name the different types of soil.

3. Who was Raja Ram Mohan Roy? List his contributions.

4. How are the members of the Rajya Sabha elected?

VIII. Answer the following in detail:

5×2=10

1. What is Green Revolution? How has India benefitted from it?

2. Mass media plays an important role in our lives. How?

IX. Identify the following pictures and write short notes:

2×2=4

1.



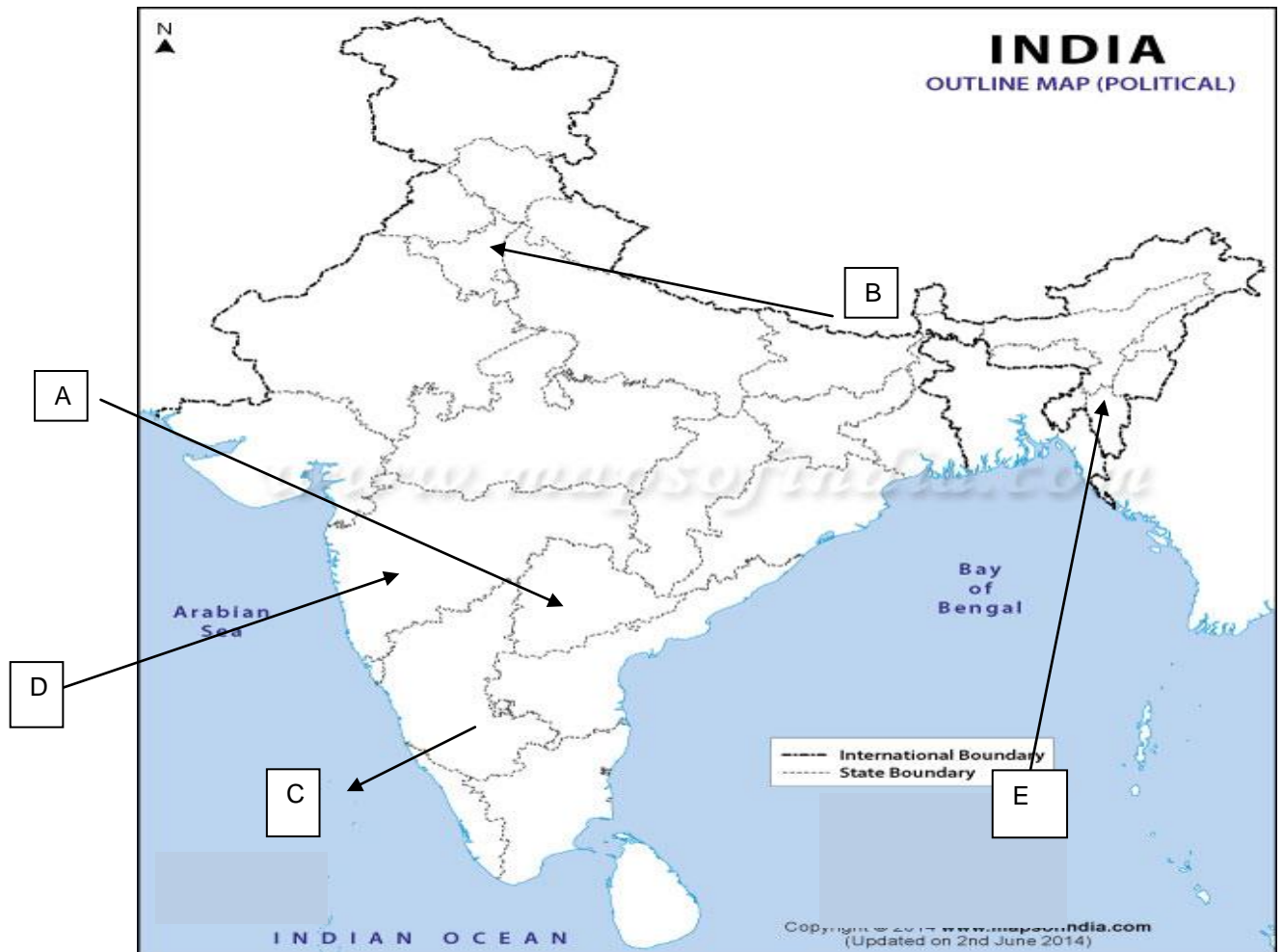
2.



X. Map Work:

a. Identify the following according to the alphabets given in the Political map of India.

0.5 × 5 = 2.5



b. Mark and label the following :

0.5 × 5 = 2.5

1. State where Desert soil is found
2. State with Alluvial soil
3. Jim Corbet National Park
4. Gir National Park
5. Sugarcane producing state